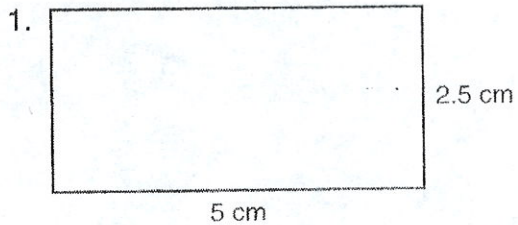


Name: _____

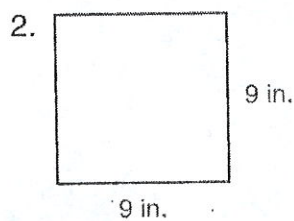
Unit 5- Geometry

Practice

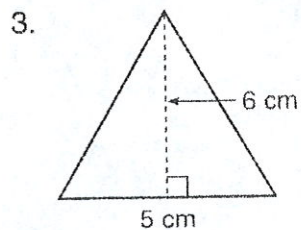
Directions: For questions 1 through 5, find the area of each triangle or rectangle.



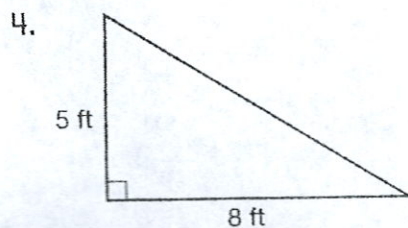
$A =$ _____



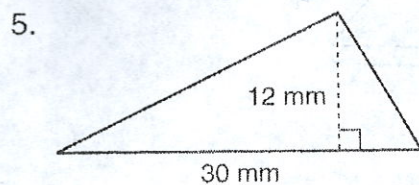
$A =$ _____



$A =$ _____




$A =$ _____



$A =$ _____

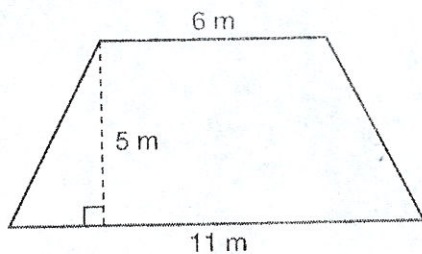
Directions: For questions 6 through 9, find the area of each quadrilateral.

6.



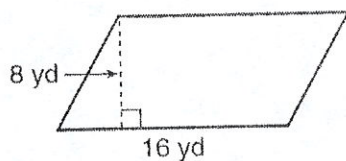
$A =$ _____

7.



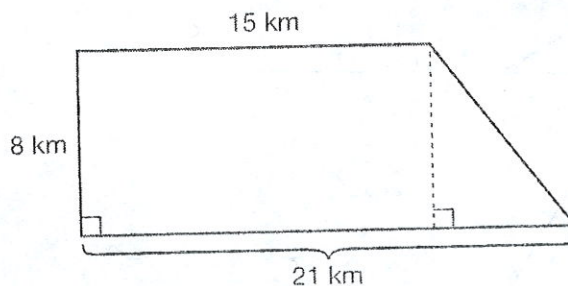
$A =$ _____

8.



$A =$ _____

9. What is the area of the following trapezoid?



- A. 120 km^2
- B. 144 km^2
- C. 148 km^2
- D. 168 km^2